

Notations :

- 1.Options shown in green color and with ✓ icon are correct.
- 2.Options shown in red color and with ✗ icon are incorrect.

Question Paper Name :	Technician Gr III 1208S2
Subject Name :	Technician Gr III
Actual Answer Key :	Yes
Calculator :	None
Magnifying Glass Required? :	No
Ruler Required? :	No
Eraser Required? :	No
Scratch Pad Required? :	No
Rough Sketch/Notepad Required? :	No
Protractor Required? :	No
Show Watermark on Console? :	Yes
Highlighter :	No
Auto Save on Console?	No
Change Font Color :	No
Change Background Color :	No
Change Theme :	No
Help Button :	No
Show Reports :	No
Show Progress Bar :	No
Is this Group for Examiner? :	No
Examiner permission :	Cant View
Show Progress Bar? :	No

WWW.ITIEDUCATION.COM

Domain Knowledge

Section type :	Online
Section Negative Marks :	0
Enable Mark as Answered Mark for Review and Clear Response :	Yes
Maximum Instruction Time :	0
Is Section Default? :	null

Question Number : 1 Question Id : 630680300937 Is Question Mandatory : No Calculator : None Response Time : N.A Think Time : N.A Minimum Instruction Time : 0 Correct Marks : 1 Wrong Marks : 0

Which of the following fire extinguisher types works with wet chemicals?

Options :

1. ✘ Class C

2. ✘ Class D

3. ✔ Class F

4. ✘ Class H

WWW.ITIEDUCATION.COM

Question Number : 2 Question Id : 630680300938 Is Question Mandatory : No Calculator : None Response Time : N.A Think Time : N.A Minimum Instruction Time : 0 Correct Marks : 1 Wrong Marks : 0

Which of the following steps of first Aid is involved in its implementation?

Options :

1. ✘ First step
2. ✘ Second step
3. ✔ Third step
4. ✘ Fourth step

Question Number : 3 Question Id : 630680300939 Is Question Mandatory : No Calculator :

None Response Time : N.A Think Time : N.A Minimum Instruction Time : 0

Correct Marks : 1 Wrong Marks : 0

Which of the following is the correct size of combination pliers according to BIS?

Options :

1. ✔ 150mm
2. ✘ 250mm
3. ✘ 335mm
4. ✘ 360mm

WWW.ITIEDUCATION.COM

Question Number : 4 Question Id : 630680300940 Is Question Mandatory : No Calculator :

None Response Time : N.A Think Time : N.A Minimum Instruction Time : 0

Correct Marks : 1 Wrong Marks : 0

The movable part of a fuse designed to carry a fuse link is known as a _____.

Options :

1. ✓ Fuse-carrier

2. ✘ Fuse-base

3. ✘ Fuse-element

4. ✘ Fuse-mount

Question Number : 5 Question Id : 630680300941 Is Question Mandatory : No Calculator :

None Response Time : N.A Think Time : N.A Minimum Instruction Time : 0

Correct Marks : 1 Wrong Marks : 0

The ground wire is black, while the earth wire is green. Which among these color coding be used while wiring?

Options :

1. ✘ Black, red

2. ✘ Green, black

3. ✓ Black, green

4. ✘ Yellow, red

WWW.ITIEDUCATION.COM

Question Number : 6 Question Id : 630680300942 Is Question Mandatory : No Calculator :

None Response Time : N.A Think Time : N.A Minimum Instruction Time : 0

Correct Marks : 1 Wrong Marks : 0

Which type of fitting shop's tools group considered the files, scrapers, chisels, and drills?

Options :

1. ✘ Tightening Tools

2. ✔ Cutting Tools

3. ✘ Strking Tools

4. ✘ Holding Tools

Question Number : 7 Question Id : 630680300943 Is Question Mandatory : No Calculator :

None Response Time : N.A Think Time : N.A Minimum Instruction Time : 0

Correct Marks : 1 Wrong Marks : 0

The primary function of the _____ on a Drilling Machine is to securely hold the cutting tool.

Options :

1. ✘ Spindle

2. ✔ Chuck

3. ✘ Drill bit

4. ✘ Hand wheel

WWW.ITIEDUCATION.COM

Question Number : 8 Question Id : 630680300944 Is Question Mandatory : No Calculator :

None Response Time : N.A Think Time : N.A Minimum Instruction Time : 0

Correct Marks : 1 Wrong Marks : 0

Which of the following operations of drilling involves removing the chip present on the surface of the hole for proper seating of head nuts, etc.?

Options :

1. ✘ Reaming
2. ✘ Counter boring
3. ✘ Tapping
4. ✔ Spot facing

Question Number : 9 Question Id : 630680300945 Is Question Mandatory : No Calculator :

None Response Time : N.A Think Time : N.A Minimum Instruction Time : 0

Correct Marks : 1 Wrong Marks : 0

What is a resistor's conductance (G) in mhos if it has a 5 ohm resistance (R)?

Options :

1. ✔ 0.2
2. ✘ 0.6
3. ✘ 0.8
4. ✘ 1.2

WWW.ITIEDUCATION.COM

Question Number : 10 Question Id : 630680300946 Is Question Mandatory : No Calculator :

None Response Time : N.A Think Time : N.A Minimum Instruction Time : 0

Correct Marks : 1 Wrong Marks : 0

The factor in the resistance which takes into account the nature of the material is _____.

Options :

1. ✘ Conductivity

2. ✔ Resistivity

3. ✘ Resistor

4. ✘ Conductor

Question Number : 11 Question Id : 630680300947 Is Question Mandatory : No Calculator :

None Response Time : N.A Think Time : N.A Minimum Instruction Time : 0

Correct Marks : 1 Wrong Marks : 0

Which type of joint is shown in the following figure?



Options :

1. ✘ Knotted tap joint

2. ✘ Scarfed joint

3. ✔ Western union joint

4. ✘ Duplex cross-tap joint

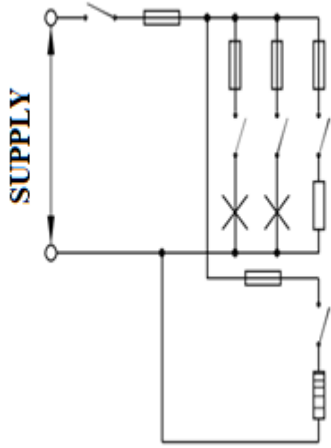
WWW.ITIEDUCATION.COM

Question Number : 12 Question Id : 630680300948 Is Question Mandatory : No Calculator :

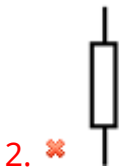
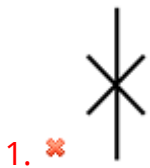
None Response Time : N.A Think Time : N.A Minimum Instruction Time : 0

Correct Marks : 1 Wrong Marks : 0

Which of the following symbols is represented in the electric circuit figure as a fuse?



Options :



WWW.ITIEDUCATION.COM

Question Number : 13 Question Id : 630680300949 Is Question Mandatory : No Calculator :

None Response Time : N.A Think Time : N.A Minimum Instruction Time : 0

Correct Marks : 1 Wrong Marks : 0

Which of the following materials has a lower conductance than another?

Options :

1. ✘ Steel

2. ✘ Lead

3. ✔ Nichrome

4. ✘ Mercury

Question Number : 14 Question Id : 630680300950 Is Question Mandatory : No Calculator :

None Response Time : N.A Think Time : N.A Minimum Instruction Time : 0

Correct Marks : 1 Wrong Marks : 0

What percentage of diffuse systems are used in general lighting?

Options :

1. ✘ 10%

2. ✘ 30%

3. ✔ 50%

4. ✘ 80%

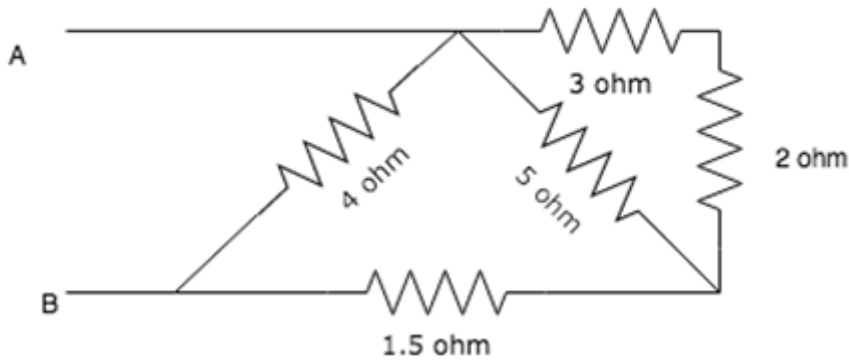
WWW.ITIEDUCATION.COM

Question Number : 15 Question Id : 630680300951 Is Question Mandatory : No Calculator :

None Response Time : N.A Think Time : N.A Minimum Instruction Time : 0

Correct Marks : 1 Wrong Marks : 0

What is the equivalent resistance of the following circuit?



Options :

1. ✓ 2 Ω
2. ✗ 4 Ω
3. ✗ 6 Ω
4. ✗ 8 Ω

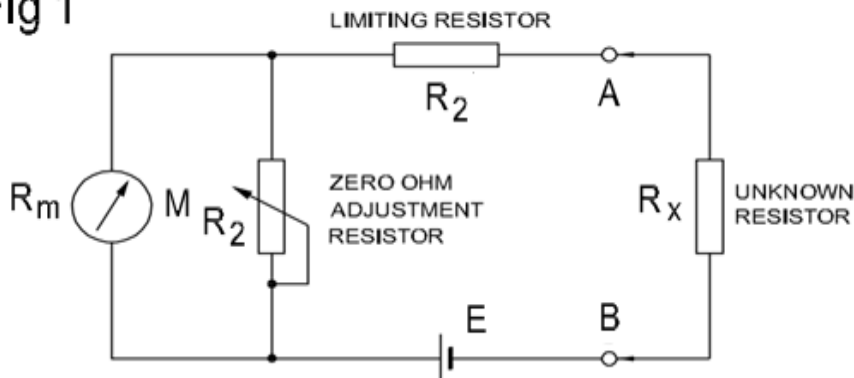
Question Number : 16 Question Id : 630680300952 Is Question Mandatory : No Calculator :

None Response Time : N.A Think Time : N.A Minimum Instruction Time : 0

Correct Marks : 1 Wrong Marks : 0

Describe the meter type that is used in the following circuit for measuring the resistance:

Fig 1



Options :

1. ✗ Shunt type ohmmeter

2. ✓ Series type ohmmeter

3. ✗ Bridge type ohmmeter

4. ✗ DC type ohmmeter

**Question Number : 17 Question Id : 630680300953 Is Question Mandatory : No Calculator :
None Response Time : N.A Think Time : N.A Minimum Instruction Time : 0**

Correct Marks : 1 Wrong Marks : 0

What is the capacitive reactance of a $10\mu\text{F}$ capacitor that is connected to a 200V, 50Hz supply?

Options :

1. ✗ 127.5Ω

2. ✗ 215.8Ω

3. ✓ 318.4Ω

4. ✗ 387.6Ω

WWW.ITIEDUCATION.COM

**Question Number : 18 Question Id : 630680300954 Is Question Mandatory : No Calculator :
None Response Time : N.A Think Time : N.A Minimum Instruction Time : 0**

Correct Marks : 1 Wrong Marks : 0

Which of the following is an example of Direct current?

Options :

1. ✗ Trapezoidal

2. ✘ Triangular

3. ✔ Pulsating

4. ✘ Square

**Question Number : 19 Question Id : 630680300955 Is Question Mandatory : No Calculator :
None Response Time : N.A Think Time : N.A Minimum Instruction Time : 0**

Correct Marks : 1 Wrong Marks : 0

Which of the following AC quantities is equal to two times the maximum value of a sine wave?

Options :

1. ✘ Peak value

2. ✘ Effective value

3. ✘ Instantaneous value

4. ✔ Peak to peak value

WWW.ITIEDUCATION.COM

**Question Number : 20 Question Id : 630680300956 Is Question Mandatory : No Calculator :
None Response Time : N.A Think Time : N.A Minimum Instruction Time : 0**

Correct Marks : 1 Wrong Marks : 0

Which of the following represents the peak value of a sine wave?

Options :

1. ✘ 1.11 x the RMS value.

2. ✓ 1.414 x the RMS value.

3. ✘ 1.414 x the Average value.

4. ✘ 1.111 x the Average value.

Question Number : 21 Question Id : 630680300957 Is Question Mandatory : No Calculator :

None Response Time : N.A Think Time : N.A Minimum Instruction Time : 0

Correct Marks : 1 Wrong Marks : 0

What current is flowing through an inductance of 4 H when the reactive power is 2462 VARs?

Options :

1. ✘ 0.8A

2. ✓ 1.4A

3. ✘ 2.6A

4. ✘ 3.6A

WWW.ITIEDUCATION.COM

Question Number : 22 Question Id : 630680300958 Is Question Mandatory : No Calculator :

None Response Time : N.A Think Time : N.A Minimum Instruction Time : 0

Correct Marks : 1 Wrong Marks : 0

Which of the following magnetic properties is defined as 'if a magnet is handled roughly by heating and hammering, it will lose its magnetism?'

Options :

1. ✘ Property of strength
2. ✘ Saturation property
3. ✔ Demagnetizing property
4. ✘ Property of attraction and repulsion

Question Number : 23 Question Id : 630680300959 Is Question Mandatory : No Calculator :

None Response Time : N.A Think Time : N.A Minimum Instruction Time : 0

Correct Marks : 1 Wrong Marks : 0

Which of the following variables has risen while a magnetic coil's magnetic flux has fallen?

Options :

1. ✘ Number of turns
2. ✘ Current in coil
3. ✔ Length of the magnetic path
4. ✘ Cross sectional area

WWW.ITIEDUCATION.COM

Question Number : 24 Question Id : 630680300960 Is Question Mandatory : No Calculator :

None Response Time : N.A Think Time : N.A Minimum Instruction Time : 0

Correct Marks : 1 Wrong Marks : 0

If soft iron is used as a core material instead of hardened steel, the coil will have _____.

Options :

1. ✘ Less inductance
2. ✔ More inductance
3. ✘ No changes in inductance
4. ✘ Infinity inductance

Question Number : 25 Question Id : 630680300961 Is Question Mandatory : No Calculator :

None Response Time : N.A Think Time : N.A Minimum Instruction Time : 0

Correct Marks : 1 Wrong Marks : 0

What is the equivalent capacitor of two capacitors, each with a capacitance of 47 nF and connected in series?

Options :

1. ✘ 12.5 nF
2. ✔ 23.5 nF
3. ✘ 58.6 nF
4. ✘ 94.0 nF

WWW.ITIEDUCATION.COM

Question Number : 26 Question Id : 630680300962 Is Question Mandatory : No Calculator :

None Response Time : N.A Think Time : N.A Minimum Instruction Time : 0

Correct Marks : 1 Wrong Marks : 0

Which of the following examples represents the chemical effect of the electric current?

Options :

1. ✓ Metal refinery

2. ✘ Electric lamp

3. ✘ Electric instrument

4. ✘ Light emitting diode

Question Number : 27 Question Id : 630680300963 Is Question Mandatory : No Calculator :

None Response Time : N.A Think Time : N.A Minimum Instruction Time : 0

Correct Marks : 1 Wrong Marks : 0

The anode is the _____ side and a cathode is a _____ side.

Options :

1. ✘ Positive, positive

2. ✘ Negative, negative

3. ✓ Positive, negative

4. ✘ Negative, positive

WWW.ITIEDUCATION.COM

Question Number : 28 Question Id : 630680300964 Is Question Mandatory : No Calculator :

None Response Time : N.A Think Time : N.A Minimum Instruction Time : 0

Correct Marks : 1 Wrong Marks : 0

Which of these best describes a dry cell?

Options :

1. ✓ Carbon zinc cell

2. ✗ Voltaic cell

3. ✗ Mercury cell

4. ✗ Lithium cell

Question Number : 29 Question Id : 630680300965 Is Question Mandatory : No Calculator :

None Response Time : N.A Think Time : N.A Minimum Instruction Time : 0

Correct Marks : 1 Wrong Marks : 0

Which of the following lead acid battery components has a small pole extending upward from each cluster of welded plates from the plate connector?

Options :

1. ✗ Separators

2. ✓ Post terminal

3. ✗ Containers

4. ✗ Plates

WWW.ITIEDUCATION.COM

Question Number : 30 Question Id : 630680300966 Is Question Mandatory : No Calculator :

None Response Time : N.A Think Time : N.A Minimum Instruction Time : 0

Correct Marks : 1 Wrong Marks : 0

Which of the following indicates the electrolyte in the Edison cell?

Options :

1. ✘ PbO

2. ✘ NiO₂

3. ✔ KOH

4. ✘ H₂SO₄

Question Number : 31 Question Id : 630680300967 Is Question Mandatory : No Calculator :

None Response Time : N.A Think Time : N.A Minimum Instruction Time : 0

Correct Marks : 1 Wrong Marks : 0

What process below has nothing to do with a photovoltaic cell?

Options :

1. ✘ The absorption of light, generating electron-hole pairs extraction

2. ✘ The separation of charge carriers of opposite types

3. ✔ The charge carriers produce the heat

4. ✘ The separate extraction of those carriers to an external circuit

Question Number : 32 Question Id : 630680300968 Is Question Mandatory : No Calculator :

None Response Time : N.A Think Time : N.A Minimum Instruction Time : 0

Correct Marks : 1 Wrong Marks : 0

Any wiring arrangement should have an insulation resistance of at least _____.

Options :

1. ✘ $100\ \Omega$

2. ✘ $1\text{K}\Omega$

3. ✔ $1\text{M}\Omega$

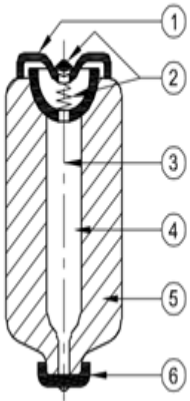
4. ✘ $100\text{M}\Omega$

Question Number : 33 Question Id : 630680300969 Is Question Mandatory : No Calculator :

None Response Time : N.A Think Time : N.A Minimum Instruction Time : 0

Correct Marks : 1 Wrong Marks : 0

In the accompanying cartridge fuse figure, which of the following numbers represents the sand filling?



WWW.ITIEDUCATION.COM

Options :

1. ✘ 1

2. ✔ 4

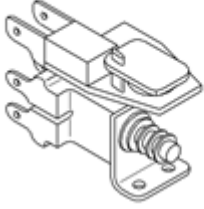
3. ✘ 5

4. ✘ 6

**Question Number : 34 Question Id : 630680300970 Is Question Mandatory : No Calculator :
None Response Time : N.A Think Time : N.A Minimum Instruction Time : 0**

Correct Marks : 1 Wrong Marks : 0

Determine the relay type from the accompanying diagram.



Options :

1. ✘ Clapper-type armature relay
2. ✘ Ferried relay
3. ✔ Impulse relay
4. ✘ Mechanical re-set relay

WWW.ITIEDUCATION.COM

**Question Number : 35 Question Id : 630680300971 Is Question Mandatory : No Calculator :
None Response Time : N.A Think Time : N.A Minimum Instruction Time : 0**

Correct Marks : 1 Wrong Marks : 0

Which type of wiring takes less installation time than another?

Options :

1. ✔ Casing & Capping
2. ✘ TRS Batten wiring
3. ✘ Metal Conduit wiring

4. ✘ PVC conduit wiring

Question Number : 36 Question Id : 630680300972 Is Question Mandatory : No Calculator :

None Response Time : N.A Think Time : N.A Minimum Instruction Time : 0

Correct Marks : 1 Wrong Marks : 0

If a 3 HP motor has an efficiency of 85% and a power factor of 0.8 at a 400 volt supply, what is the full load current?

Options :

1. ✘ 2.63A

2. ✔ 4.68A

3. ✘ 6.35A

4. ✘ 9.65A

WWW.ITIEDUCATION.COM

Question Number : 37 Question Id : 630680300973 Is Question Mandatory : No Calculator :

None Response Time : N.A Think Time : N.A Minimum Instruction Time : 0

Correct Marks : 1 Wrong Marks : 0

Which of the following happens when wiring has a short circuit fault?

Options :

1. ✘ Break in a wire

2. ✘ Disconnected terminal

3. ✔ Damaged insulation

4. ✘ Faulty switch contacts

Question Number : 38 Question Id : 630680300974 Is Question Mandatory : No Calculator :

None Response Time : N.A Think Time : N.A Minimum Instruction Time : 0

Correct Marks : 1 Wrong Marks : 0

The following sign in a measuring device represents what kind of instruction?



Options :

1. ✘ Moving iron instrument
2. ✘ Enclosed electrodynamic quotient instrument
3. ✘ Device with built-in measuring rectifier
4. ✔ Observe instructions for use

WWW.ITIEDUCATION.COM

Question Number : 39 Question Id : 630680300975 Is Question Mandatory : No Calculator :

None Response Time : N.A Think Time : N.A Minimum Instruction Time : 0

Correct Marks : 1 Wrong Marks : 0

An operating force is what kind of instrument force?

Options :

1. ✘ Controlling force
2. ✘ Directive force

3. ✘ Damping force

4. ✔ Deflective force

Question Number : 40 Question Id : 630680300976 Is Question Mandatory : No Calculator :

None Response Time : N.A Think Time : N.A Minimum Instruction Time : 0

Correct Marks : 1 Wrong Marks : 0

Which of the following pertains to the PMMC instrument's benefits?

Options :

1. ✔ Not affected by stray magnetic fields

2. ✘ Uses only in DC measurement

3. ✘ It is very delicate

4. ✘ It is costly compared to a moving iron

WWW.ITIEDUCATION.COM

Question Number : 41 Question Id : 630680300977 Is Question Mandatory : No Calculator :

None Response Time : N.A Think Time : N.A Minimum Instruction Time : 0

Correct Marks : 1 Wrong Marks : 0

In an energy meter, if the disc rotates continuously even when there is no current flow through the current coil and only the pressure coil is energized, then which type of error is produced?

Options :

1. ✘ Chirring error

2. ✔ Creeping error

3. ✘ Phase angle error

4. ✘ Eddy current error

Question Number : 42 Question Id : 630680300978 Is Question Mandatory : No Calculator :

None Response Time : N.A Think Time : N.A Minimum Instruction Time : 0

Correct Marks : 1 Wrong Marks : 0

Which of the nuclear reactor types is classified according to the moderator?

Options :

1. ✘ Thermal reactors

2. ✘ Enriched uranium reactors

3. ✔ Beryllium reactors

4. ✘ Boiling water reactor

WWW.ITIEDUCATION.COM

Question Number : 43 Question Id : 630680300979 Is Question Mandatory : No Calculator :

None Response Time : N.A Think Time : N.A Minimum Instruction Time : 0

Correct Marks : 1 Wrong Marks : 0

Which of the following overhead lines is considered a 220 KV or above electric supply system?

Options :

1. ✔ Primary transmission

2. ✘ Secondary transmission

3. ✘ Primary distribution

4. ✘ Secondary distribution

Question Number : 44 Question Id : 630680300980 Is Question Mandatory : No Calculator :

None Response Time : N.A Think Time : N.A Minimum Instruction Time : 0

Correct Marks : 1 Wrong Marks : 0

The type of radial distribution system is classified based on the following:

Options :

1. ✘ Power Line Construction

2. ✔ Network Connection

3. ✘ Nature of Electric Current

4. ✘ Power Service

WWW.ITIEDUCATION.COM

Question Number : 45 Question Id : 630680300981 Is Question Mandatory : No Calculator :

None Response Time : N.A Think Time : N.A Minimum Instruction Time : 0

Correct Marks : 1 Wrong Marks : 0

Identify the name of the protective device whose symbol is shown in the following figure.



Options :

1. ✘ Circuit breaker

2. ✘ Circuit breaker with isolator

3. ✔ Group operating switch

4. ✘ Lightning arrester

Question Number : 46 Question Id : 630680300982 Is Question Mandatory : No Calculator :

None Response Time : N.A Think Time : N.A Minimum Instruction Time : 0

Correct Marks : 1 Wrong Marks : 0

Which is used in substations where communication is done by AC power lines?

Options :

1. ✘ Bus - bar

2. ✔ Coupling capacitor

3. ✘ Earth switch

4. ✘ Lightning arrester

WWW.ITIEDUCATION.COM

Question Number : 47 Question Id : 630680300983 Is Question Mandatory : No Calculator :

None Response Time : N.A Think Time : N.A Minimum Instruction Time : 0

Correct Marks : 1 Wrong Marks : 0

Which of the subsequent duties has nothing to do with switchgear?

Options :

1. ✘ It protects the equipment from short-circuits & fault currents.

2. ✘ This device gives isolation to the circuits from power supplies.
3. ✔ It decreases the availability of the system by allowing more than one source to feed a load.
4. ✘ It can open & close the electrical circuits under the conditions of normal & abnormal.

**Question Number : 48 Question Id : 630680300984 Is Question Mandatory : No Calculator :
None Response Time : N.A Think Time : N.A Minimum Instruction Time : 0**

Correct Marks : 1 Wrong Marks : 0

Which of the following applications uses the ignition transformer?

Options :

1. ✘ Overload trip circuit
2. ✔ Automobile
3. ✘ Electric Welding
4. ✘ Electronic bell

WWW.ITIEDUCATION.COM

**Question Number : 49 Question Id : 630680300985 Is Question Mandatory : No Calculator :
None Response Time : N.A Think Time : N.A Minimum Instruction Time : 0**

Correct Marks : 1 Wrong Marks : 0

Which type of colour is produced when the Acidity test kit shows the acidity value number 1.0?

Options :

1. ✘ Black

2. ✘ Green

3. ✔ Orange

4. ✘ Yellow

Question Number : 50 Question Id : 630680300986 Is Question Mandatory : No Calculator :

None Response Time : N.A Think Time : N.A Minimum Instruction Time : 0

Correct Marks : 1 Wrong Marks : 0

Which of the following describes the full pitch winding condition?

Options :

1. ✘ Coil pitch < pole pitch

2. ✘ Coil pitch > pole pitch

3. ✔ Coil pitch = pole pitch

4. ✘ Coil pitch = 2 x pole pitch

WWW.ITIEDUCATION.COM

Question Number : 51 Question Id : 630680300987 Is Question Mandatory : No Calculator :

None Response Time : N.A Think Time : N.A Minimum Instruction Time : 0

Correct Marks : 1 Wrong Marks : 0

Which of the following tests of AC motor windings is known as the Growler Test?

Options :

1. ✘ Continuity test

2. ✘ Resistance test

3. ✘ Polarity test

4. ✔ Short circuit test

Question Number : 52 Question Id : 630680300988 Is Question Mandatory : No Calculator :

None Response Time : N.A Think Time : N.A Minimum Instruction Time : 0

Correct Marks : 1 Wrong Marks : 0

Which is an electrically controlled double break switch used for switching ON or OFF the electrical circuit, similar to a relay with higher current ratings?

Options :

1. ✘ Miniature circuit breaker

2. ✔ Contactor

3. ✘ Thermal overload relays

4. ✘ Time delay relay


WWW.ITIEDUCATION.COM

Question Number : 53 Question Id : 630680300989 Is Question Mandatory : No Calculator :

None Response Time : N.A Think Time : N.A Minimum Instruction Time : 0

Correct Marks : 1 Wrong Marks : 0

Identify the name of the terminal block in the given figure.



Options :

1. ✘ Tab Connector terminal block
2. ✔ Pluggable terminal block
3. ✘ Push-fit terminal block
4. ✘ Spring-cage terminal block

Question Number : 54 Question Id : 630680300990 Is Question Mandatory : No Calculator : None Response Time : N.A Think Time : N.A Minimum Instruction Time : 0

Correct Marks : 1 Wrong Marks : 0

WWW.ITIEDUCATION.COM

Which of the following principles of MCB doesn't apply?

Options :

1. ✘ Thermal magnetic
2. ✘ Magnetic hydraulic
3. ✔ Magnetic light
4. ✘ Assisted bimetallic

Question Number : 55 Question Id : 630680300991 Is Question Mandatory : No Calculator :

None Response Time : N.A Think Time : N.A Minimum Instruction Time : 0

Correct Marks : 1 Wrong Marks : 0

Which of the following symbols shows the contact resting?

Options :

1. ✘



2. ✘



3. ✔



4. ✘



WWW.ITIEDUCATION.COM

Question Number : 56 Question Id : 630680300992 Is Question Mandatory : No Calculator :

None Response Time : N.A Think Time : N.A Minimum Instruction Time : 0

Correct Marks : 1 Wrong Marks : 0

Which of the following conditions occurs in good condition when cable testing with a multi-meter?

Options :

1. ✔ 0

2. ✘ 1

3. ✘ Infinity

4. ✘ 50

Question Number : 57 Question Id : 630680300993 Is Question Mandatory : No Calculator :

None Response Time : N.A Think Time : N.A Minimum Instruction Time : 0

Correct Marks : 1 Wrong Marks : 0

Which of the following is a disadvantage of the earthing system?

Options :

1. ✘ Safety for human life

2. ✘ Voltage stabilization

3. ✘ Over voltage protection

4. ✔ Energy losses through leakage current

WWW.ITIEDUCATION.COM

Question Number : 58 Question Id : 630680300994 Is Question Mandatory : No Calculator :

None Response Time : N.A Think Time : N.A Minimum Instruction Time : 0

Correct Marks : 1 Wrong Marks : 0

The earth electrode resistance value shouldn't be greater than_____.

Options :

1. ✔ 5Ω

2. ✘ 25Ω

3. ✘ 50Ω

4. ✘ 100Ω

Question Number : 59 Question Id : 630680300995 Is Question Mandatory : No Calculator :

None Response Time : N.A Think Time : N.A Minimum Instruction Time : 0

Correct Marks : 1 Wrong Marks : 0

What among the following relates to Indian Electricity rule 88?

Options :

1. ✘ Earthing

2. ✔ Guarding

3. ✘ Pole type substations

4. ✘ Systems at medium voltage

WWW.ITIEDUCATION.COM

Question Number : 60 Question Id : 630680300996 Is Question Mandatory : No Calculator :

None Response Time : N.A Think Time : N.A Minimum Instruction Time : 0

Correct Marks : 1 Wrong Marks : 0

Inadvertently coupling a live component of an electrical system to earth called as _____.

Options :

1. ✘ Dead

2. ✘ Earth continuity conductor

3. ✓ Earth fault

4. ✘ Leakage current

General Aptitude

Section type :	Online
Section Negative Marks :	0
Enable Mark as Answered Mark for Review and Clear Response :	Yes
Maximum Instruction Time :	0
Is Section Default? :	null

Question Number : 61 Question Id : 630680300997 Is Question Mandatory : No Calculator :
None Response Time : N.A Think Time : N.A Minimum Instruction Time : 0

Correct Marks : 1 Wrong Marks : 0

Match Column A and Column B and select the correct option.

Column A	Column B
1. Youngest vice chancellor of Calcutta University	a. Raja Ram Mohan Roy
2. Ramakrishna mission established by	b. Ishwar Chandra Vidyasagar
3. Born in Birsingha Village of West Bengal	c. Shyama Prasad Mukherjee
4. Founder of Brahma Samaj	d. Swami Vivekananda

Options :

1. ✘ 1-a, 2-c, 3-d, 4-b

2. ✓ 1-c, 2-d, 3-b, 4-a

3. ✘ 1-b, 2-d, 3-c, 4-a

4. ✖ 1-a, 2-c, 3-b, 4-d

Question Number : 62 Question Id : 630680300998 Is Question Mandatory : No Calculator :

None Response Time : N.A Think Time : N.A Minimum Instruction Time : 0

Correct Marks : 1 Wrong Marks : 0

In which of the following districts of West Bengal is Dakhil Darwaja, an impressive gateway, built during 15th century, situated?

Options :

1. ✖ Uttar Dinajpur

2. ✖ Nadia

3. ✔ Malda

4. ✖ Dakshin Dinajpur

Question Number : 63 Question Id : 630680300999 Is Question Mandatory : No Calculator :

None Response Time : N.A Think Time : N.A Minimum Instruction Time : 0

Correct Marks : 1 Wrong Marks : 0

Which of the following rivers does NOT pass through West Bengal?

Options :

1. ✔ Pranhita River

2. ✖ Subernarekha River

3. ✖ Damodar River

4. ✖ Barakar River

Question Number : 64 Question Id : 630680301000 Is Question Mandatory : No Calculator :

None Response Time : N.A Think Time : N.A Minimum Instruction Time : 0

Correct Marks : 1 Wrong Marks : 0

From which of the following legislative assembly constituencies did Mamata Banerjee win by-

election in 2021?

Options :

1. ✘ Noapara
2. ✘ Maniktola
3. ✘ Balagarh
4. ✔ Bhabanipur

**Question Number : 65 Question Id : 630680301001 Is Question Mandatory : No Calculator :
None Response Time : N.A Think Time : N.A Minimum Instruction Time : 0**

Correct Marks : 1 Wrong Marks : 0

Approximately what amount of the total budget was presented by the Minister of State for Finance, Chandrima Bhattacharya, for West Bengal State Budget 2023-24?

Options :

1. ✘ 19.93 lakh crore
2. ✘ 14.8 lakh crore
3. ✔ 3.39 lakh crore
4. ✘ 52.12 lakh crore

WWW.ITIEDUCATION.COM

**Question Number : 66 Question Id : 630680301002 Is Question Mandatory : No Calculator :
None Response Time : N.A Think Time : N.A Minimum Instruction Time : 0**

Correct Marks : 1 Wrong Marks : 0

Select the number from among the given options that can replace the question mark (?) in the following series.

151, 157, 163, 167, ?, 179, 181

Options :

1. ✘ 169
2. ✔ 173

3. ✖ 175

4. ✖ 177

**Question Number : 67 Question Id : 630680301003 Is Question Mandatory : No Calculator :
None Response Time : N.A Think Time : N.A Minimum Instruction Time : 0**

Correct Marks : 1 Wrong Marks : 0

How many pairs of letters are present in the word 'PERSONALITY' that have as many letters between them as in the English alphabetical series? (Count both forward and backward directions)

Options :

1. ✖ Four

2. ✖ Five

3. ✖ Six

4. ✔ Seven

WWW.ITIEDUCATION.COM

**Question Number : 68 Question Id : 630680301004 Is Question Mandatory : No Calculator :
None Response Time : N.A Think Time : N.A Minimum Instruction Time : 0**

Correct Marks : 1 Wrong Marks : 0

Select the term from among the given options that can replace the question mark (?) in the following series.

MOTIVE – NMWFXD – OKZCZC – PICZBB – ?

Options :

1. ✖ QGFVDA

2. ✘ QCEVDA

3. ✔ QGFWDA

4. ✘ QDEWDA

Question Number : 69 Question Id : 630680301005 Is Question Mandatory : No Calculator :

None Response Time : N.A Think Time : N.A Minimum Instruction Time : 0

Correct Marks : 1 Wrong Marks : 0

In a certain code language, 'SUCH' is coded as 1338 and 'HAND' is coded as 8154. How will 'CARE' be coded in that language?

Options :

1. ✘ 3591

2. ✘ 3185

3. ✘ 3519

4. ✔ 3195

WWW.ITIEDUCATION.COM

Question Number : 70 Question Id : 630680301006 Is Question Mandatory : No Calculator :

None Response Time : N.A Think Time : N.A Minimum Instruction Time : 0

Correct Marks : 1 Wrong Marks : 0

In a certain code language, 'PERSON' is coded as 'OFPULQ' and 'SOCIAL' is coded as 'RPAKXO'. How will 'RATHER' be coded in that language?

Options :

1. ✘ QBSJCU

2. ✓ QBRJBU

3. ✗ QCSJCU

4. ✗ QZVFHU

**Question Number : 71 Question Id : 630680301007 Is Question Mandatory : No Calculator :
None Response Time : N.A Think Time : N.A Minimum Instruction Time : 0**

Correct Marks : 1 Wrong Marks : 0

Pointing towards Shankar, Arti said, "His daughter-in-law's son is my maternal uncle". How is Shankar related to Arti?

Options :

1. ✗ Maternal grandfather

2. ✓ Great grandfather

3. ✗ Father-in-law

4. ✗ Father

WWW.ITIEDUCATION.COM

**Question Number : 72 Question Id : 630680301008 Is Question Mandatory : No Calculator :
None Response Time : N.A Think Time : N.A Minimum Instruction Time : 0**

Correct Marks : 1 Wrong Marks : 0

One of the triads in the options does not follow the same logic as the other triads. Select the triad that is different.

Options :

1. ✗ METHOD-TEHODM-HEODMT

2. ✓ GROUPS-ORUPSG-URSPGO

3. ✗ SAMPLE-MAPLES-PALESM

4. ✗ RESULT-SEULTR-UELTRS

Question Number : 73 Question Id : 630680301009 Is Question Mandatory : No Calculator :

None Response Time : N.A Think Time : N.A Minimum Instruction Time : 0

Correct Marks : 1 Wrong Marks : 0

Four letter-clusters have been given, out of which three are alike in some manner and one is different. Select the one that is different.

Options :

1. ✗ EUHP

2. ✗ GSJN

3. ✗ KONJ

4. ✓ MNPH

WWW.ITIEDUCATION.COM

Question Number : 74 Question Id : 630680301010 Is Question Mandatory : No Calculator :

None Response Time : N.A Think Time : N.A Minimum Instruction Time : 0

Correct Marks : 1 Wrong Marks : 0

Select the number from among the given options that can replace the question mark (?) in the following series.

23, 109, ?, 1231, 2053

Options :

1. ✘ 336

2. ✔ 307

3. ✘ 294

4. ✘ 262

Question Number : 75 Question Id : 630680301011 Is Question Mandatory : No Calculator :

None Response Time : N.A Think Time : N.A Minimum Instruction Time : 0

Correct Marks : 1 Wrong Marks : 0

Select the set of numbers from the options that is similar to the given set of numbers in a certain manner

{16, 128, 432}

Options :

1. ✘ 54, 125, 686

2. ✘ 27, 125, 343

3. ✘ 27, 250, 686

4. ✔ 54, 250, 686

WWW.ITIEDUCATION.COM

Question Number : 76 Question Id : 630680301012 Is Question Mandatory : No Calculator :

None Response Time : N.A Think Time : N.A Minimum Instruction Time : 0

Correct Marks : 1 Wrong Marks : 0

If $2^{x+y} = 16$ and $3^{x-y} = 729$, then $3x - 2y = ?$

Options :

1. ✘ 15

2. ✔ 17

3. ✘ 19

4. ✘ 21

**Question Number : 77 Question Id : 630680301013 Is Question Mandatory : No Calculator :
None Response Time : N.A Think Time : N.A Minimum Instruction Time : 0**

Correct Marks : 1 Wrong Marks : 0

An amount of ₹3,500 reduces to ₹2737 after 2 successive discounts. If one of the discounts is 15%, then the other discount is:

Options :

1. ✘ 12%

2. ✘ 10%

3. ✘ 7%

4. ✔ 8%

WWW.ITIEDUCATION.COM

**Question Number : 78 Question Id : 630680301014 Is Question Mandatory : No Calculator :
None Response Time : N.A Think Time : N.A Minimum Instruction Time : 0**

Correct Marks : 1 Wrong Marks : 0

The simple interest on a sum of ₹4,800 for 3 years at $7\frac{1}{3}\%$ p.a. is:

Options :

1. ✓ ₹1,056

2. ✗ ₹1,506

3. ✗ ₹1,605

4. ✗ ₹1,065

Question Number : 79 Question Id : 630680301015 Is Question Mandatory : No Calculator :

None Response Time : N.A Think Time : N.A Minimum Instruction Time : 0

Correct Marks : 1 Wrong Marks : 0

During a journey, Amar travels at a speed of 45 km/h for the first 2 hours. For the next 2.5 hours, his speed is 52 km/h, and in the next 1.5 hours he reaches the destination at a certain constant speed. The average speed of the whole journey is 48 km/h. His speed in the last 1.5 hours is:

Options :

1. ✗ $45\frac{2}{3}$ km/h

2. ✗ $44\frac{1}{3}$ km/h

3. ✓ $45\frac{1}{3}$ km/h

4. ✗ $44\frac{2}{3}$ km/h

WWW.ITIEDUCATION.COM

Question Number : 80 Question Id : 630680301016 Is Question Mandatory : No Calculator :

None Response Time : N.A Think Time : N.A Minimum Instruction Time : 0

Correct Marks : 1 Wrong Marks : 0

A and B can do a piece of work in 30 days while B and C can do the same work in 24 days and C and A can do it in 20 days. They all work for 12 days and then B and C leave. How many days more will A take to complete the work?

Options :

1. ✘ 14 days

2. ✔ 12 days

3. ✘ 18 days

4. ✘ 21 days

English Test WWW.ITIEDUCATION.COM

Section type : Online

Section Negative Marks : 0

Enable Mark as Answered Mark for Review and Clear Response : Yes

Maximum Instruction Time : 0

Is Section Default? : null

Question Number : 81 Question Id : 630680301017 Is Question Mandatory : No Calculator :

None Response Time : N.A Think Time : N.A Minimum Instruction Time : 0

Correct Marks : 1 Wrong Marks : 0

Select the option that can be used as a one-word substitute for the underlined group of words.

The teacher had one drawback – saying of the same thing twice over in different words.

Options :

1. ✘ eulogy
2. ✔ tautology
3. ✘ audiology
4. ✘ terminology

**Question Number : 82 Question Id : 630680301018 Is Question Mandatory : No Calculator :
None Response Time : N.A Think Time : N.A Minimum Instruction Time : 0**

Correct Marks : 1 Wrong Marks : 0

Sentences of a paragraph are given below in jumbled order. Arrange the sentences in the correct order to form a meaningful and coherent paragraph.

- A. The process of comprehension is both, interactive and strategic.
- B. Rather than passively reading a text, readers must analyse it, internalise it and make it their own.
- C. Experienced readers take this for granted and may not appreciate the reading comprehension skills required.
- D. Comprehension, or extracting meaning from what you read, is the ultimate goal of reading.

Options :

1. ✘ CBDA
2. ✘ BCAD
3. ✔ DCAB
4. ✘ CADB

**Question Number : 83 Question Id : 630680301019 Is Question Mandatory : No Calculator :
None Response Time : N.A Think Time : N.A Minimum Instruction Time : 0**

Correct Marks : 1 Wrong Marks : 0

Select the option that will improve the underlined part of the given sentence. In case no improvement is needed, select 'No improvement'.

I'm sure you had enjoyed this film on misuse of mobile phones when you see it.

Options :

1. ✘ are enjoying
2. ✔ will enjoy
3. ✘ will be enjoy
4. ✘ No improvement

Question Number : 84 Question Id : 630680301020 Is Question Mandatory : No Calculator :

None Response Time : N.A Think Time : N.A Minimum Instruction Time : 0

Correct Marks : 1 Wrong Marks : 0

Select the option that will improve the underlined part of the given sentence. In case no improvement is needed, select 'No improvement'.

They have had too much food at the wedding reception they attended and felt bloated.

Options :

1. ✔ had had
2. ✘ will have
3. ✘ are having
4. ✘ No improvement

Question Number : 85 Question Id : 630680301021 Is Question Mandatory : No Calculator :

None Response Time : N.A Think Time : N.A Minimum Instruction Time : 0

Correct Marks : 1 Wrong Marks : 0

Select the option that expresses the given sentence in passive voice.

The traffic constable asked Anil to take the diversion.

Options :

1. ✘ Anil was asking to take the diversion by the traffic constable.
2. ✔ Anil was asked to take the diversion by the traffic constable.
3. ✘ Anil had been asking to take the diversion by the traffic constable.
4. ✘ Anil had been asked to take the diversion by the traffic constable.

Question Number : 86 Question Id : 630680301022 Is Question Mandatory : No Calculator :

None Response Time : N.A Think Time : N.A Minimum Instruction Time : 0

Correct Marks : 1 Wrong Marks : 0

Select the most appropriate ANTONYM of the given word.

Awry

Options :

1. ✘ Stubborn
2. ✔ Straight
3. ✘ Awkward
4. ✘ Diluted

WWW.ITIEDUCATION.COM

Question Number : 87 Question Id : 630680301023 Is Question Mandatory : No Calculator :

None Response Time : N.A Think Time : N.A Minimum Instruction Time : 0

Correct Marks : 1 Wrong Marks : 0

Select the most appropriate synonym of the given word.

The continuous movement of men and materials impelled her to go and look at the interior decoration that was being taken up next door.

Options :

1. ✘ Stopped
2. ✘ Prohibited
3. ✔ Coerced
4. ✘ Ceased

Question Number : 88 Question Id : 630680301024 Is Question Mandatory : No Calculator :

None Response Time : N.A Think Time : N.A Minimum Instruction Time : 0

Correct Marks : 1 Wrong Marks : 0

Select the correctly spelt sentence.

Options :

1. ✘ The gourmet equivalent of the yuppie is the foodie, who, in his persuit of more exotic 'eating experiences', spends his evenings studying the relative merits of new recipes.
2. ✘ The gourmet equivalent of the yuppie is the foodie, who, in his pursuit of more exotic 'eating experiences', spends his evenings studying the reletive merits of new recipes.
3. ✔ The gourmet equivalent of the yuppie is the foodie, who, in his pursuit of more exotic 'eating experiences', spends his evenings studying the relative merits of new recipes.
4. ✘ The gourmet equavalent of the yuppie is the foodie, who, in his pursuit of more exotic 'eating experiences', spends his evenings studying the relative merits of new recipes.

Question Number : 89 Question Id : 630680301025 Is Question Mandatory : No Calculator :

None Response Time : N.A Think Time : N.A Minimum Instruction Time : 0

Correct Marks : 1 Wrong Marks : 0

Select the most appropriate option to complete the given idiom/phrase.

The ball _____.

Options :

1. ✔ is in your court

2. ✘ cannot to be seen
3. ✘ has gone over the fence
4. ✘ has been played

**Question Number : 90 Question Id : 630680301026 Is Question Mandatory : No Calculator :
None Response Time : N.A Think Time : N.A Minimum Instruction Time : 0
Correct Marks : 1 Wrong Marks : 0**

Select the most appropriate option to complete the proverb.

Among the blind, _____.

Options :

1. ✘ another blind leads the rest
2. ✔ the one-eyed man is king
3. ✘ a guide dog is needed
4. ✘ there are a different set of rules

WWW.ITIEDUCATION.COM

Bengali Test

Section type :	Online
Section Negative Marks :	0
Enable Mark as Answered Mark for Review and Clear Response :	Yes
Maximum Instruction Time :	0
Is Section Default? :	null

**Question Number : 91 Question Id : 630680301027 Is Question Mandatory : No Calculator :
None Response Time : N.A Think Time : N.A Minimum Instruction Time : 0**

Correct Marks : 1 Wrong Marks : 0

মায়ে ডাকে। —এখানে কী কারক হয়েছে ?

Options :

1. ✓ কর্তৃ কারক
2. ✗ কর্ম কারক
3. ✗ করণ কারক
4. ✗ অধিকরণ কারক

**Question Number : 92 Question Id : 630680301028 Is Question Mandatory : No Calculator :
None Response Time : N.A Think Time : N.A Minimum Instruction Time : 0**

Correct Marks : 1 Wrong Marks : 0

বিশুদ্ধ বানানটি শনাক্ত কর।

Options :

1. ✓ দৈন্যপীড়িত
2. ✗ দৈন্যপিড়িত
3. ✗ দৈন্যপিড়ীত
4. ✗ দৈন্যপীরিত

WWW.ITIEDUCATION.COM

**Question Number : 93 Question Id : 630680301029 Is Question Mandatory : No Calculator :
None Response Time : N.A Think Time : N.A Minimum Instruction Time : 0**

Correct Marks : 1 Wrong Marks : 0

বিশুদ্ধ বানানটি শনাক্ত কর।

Options :

1. ✘ ন্যাকারজনক

2. ✔ ন্যাকারজনক

3. ✘ ন্যাকারজনক

4. ✘ নাকারজনক

Question Number : 94 Question Id : 630680301030 Is Question Mandatory : No Calculator :

None Response Time : N.A Think Time : N.A Minimum Instruction Time : 0

Correct Marks : 1 Wrong Marks : 0

'বিবিজ্ঞ' শব্দটির সঠিক অর্থ নির্ধারণ কর।

Options :

1. ✔ নির্জন

2. ✘ জনবহুল

3. ✘ বিশেষ

4. ✘ বিশারদ

WWW.ITIEDUCATION.COM

Question Number : 95 Question Id : 630680301031 Is Question Mandatory : No Calculator :

None Response Time : N.A Think Time : N.A Minimum Instruction Time : 0

Correct Marks : 1 Wrong Marks : 0

‘অস্তিত্ব’ শব্দটির বিপরীতার্থক শব্দ কোনটি?

Options :

1. ✘ প্রশস্তি

2. ✔ নাস্তি

3. ✘ ক্ষুদ্র

4. ✘ ভীতি

Question Number : 96 Question Id : 630680301032 Is Question Mandatory : No Calculator :

None Response Time : N.A Think Time : N.A Minimum Instruction Time : 0

Correct Marks : 1 Wrong Marks : 0

‘অরণ্যে রোদন’ বাগধারাটির নিহিতার্থ কী?

Options :

1. ✘ জঙ্গলে কান্না

2. ✘ কান্নার অভিনয়

3. ✘ চিৎকার করে কান্না

4. ✔ নিষ্ফল আবেদন

WWW.ITIEDUCATION.COM

Question Number : 97 Question Id : 630680301033 Is Question Mandatory : No Calculator :

None Response Time : N.A Think Time : N.A Minimum Instruction Time : 0

Correct Marks : 1 Wrong Marks : 0

‘ধান ভানতে শিবের গীত’ — এই প্রবাদটির নিহিতার্থ কী?

Options :

1. ✘ অন্যমনস্ক
2. ✘ প্রিয় কথা
3. ✔ অপ্রাসঙ্গিক কথা
4. ✘ বাহানা

Is Section Default? :

null

Question Id : 630680301034 Sub Question Shuffling Allowed : Yes Group Comprehension Questions : No Question Pattern Type : NonMatrix Calculator : None Response Time : N.A Think Time : N.A Minimum Instruction Time : 0

Question Numbers : (98 to 100)

অন্যদিনের মতো আজও বটের ছায়ায় মাঝে মাঝে ব্যস্ত হয়ে ওঠে রাইচরণের গণৎকারিতা। ক্লান্ত হয়ে মাঝে মাঝে ছোলা চিবোয়, আর সামনের টিউবওয়েল থেকে জল খেয়ে আসে।

রাইচরণের বয়স মন্দ হয়নি। চল্লিশ বছর তো নিশ্চয়। কিন্তু এত বেশি শুকিয়ে আর পাকিয়ে গিয়েছে বলেই একটু বুড়ো বুড়ো দেখায়। কিন্তু এই বটের ছায়া থেকে অনেক দূরে বেহালার বস্তির মেটে ঘরের দরজার সামনে তুলসীর বেদীর কাছে যে এখন গম্ভীর হয়ে দাঁড়িয়ে আছে, সেই মানুষটির চেহারা কিন্তু আজও তাজা মাধবীলতার মত ফুবফুর করে।

রাইচরণের বউ পারুলবালা। যে রাইচরণ গণৎকার, আকাশের রাহু-শনি-মঙ্গলের মতিগতির রহস্য হাতের মুঠোয় ধরে রেখেছে, সে আজ এই বটের ছায়ায় বসে কোন তন্দ্রার মধ্যে এখনও চমকে ওঠেনি। কিন্তু এতক্ষণে বেহালার বস্তির মধ্যে সেই মেটে ঘরের ভিতরে গণৎকার রাইচরণের অদৃষ্ট ভয় পেয়ে চমকে উঠেছে।

Sub questions

Question Number : 98 Question Id : 630680301035 Is Question Mandatory : No Calculator : None Response Time : N.A Think Time : N.A Minimum Instruction Time : 0

Correct Marks : 1 Wrong Marks : 0

বেহালার বস্তির মেটে ঘরের দরজার সামনে তুলসীর বেদীর কাছে কে গম্ভীর হয়ে দাঁড়িয়েছিল ?

Options :

1. ✘ রাইচরণ
2. ✘ মাধবীলতা
3. ✔ পারুলবালা
4. ✘ রাইচরণের প্রেমিকা

**Question Number : 99 Question Id : 630680301036 Is Question Mandatory : No Calculator :
None Response Time : N.A Think Time : N.A Minimum Instruction Time : 0**

Correct Marks : 1 Wrong Marks : 0

নির্ভুল বক্তব্যটি নির্ধারণ করে সঠিক উত্তর দাও।

Options :

1. ✔ ক্লান্ত হয়ে মাঝে মাঝে ছোলা চিবোয়, আর সামনের টিউবওয়েল থেকে জল খেয়ে আসে।
2. ✘ ক্লান্ত হয়ে মাঝে মাঝে বাদাম চিবোয়, আর সামনের টিউবওয়েল থেকে জল খেয়ে আসে।
3. ✘ ক্লান্ত হয়ে মাঝে মাঝে ছোলা চিবোয়, আর স্কুলের টিউবওয়েল থেকে জল খেয়ে আসে।
4. ✘ ক্লান্ত হয়ে মাঝে মাঝে ঝিমিয়ে নেয়, আর সামনের টিউবওয়েল থেকে জল খেয়ে আসে।

**Question Number : 100 Question Id : 630680301037 Is Question Mandatory : No Calculator :
None Response Time : N.A Think Time : N.A Minimum Instruction Time : 0**

Correct Marks : 1 Wrong Marks : 0

রাইচরণের ঘর কোথায় ছিল ?

Options :

- 1.

✘ सोनापुर

2. ✘ आलिपुर

3. ✘ हरिपुर

4. ✔ बेहाला

Nepali Test

Section type : Online

Section Negative Marks : 0

Enable Mark as Answered Mark for Review and
Clear Response : Yes

Maximum Instruction Time : 0

Is Section Default? : null

WWW.ITIEDUCATION.COM

Question Number : 101 Question Id : 630680301038 Is Question Mandatory : No Calculator :

None Response Time : N.A Think Time : N.A Minimum Instruction Time : 0

Correct Marks : 1 Wrong Marks : 0

साहित्यमा रस कति प्रकारका हुन्छन्?

Options :

1. ✘ सात

2. ✘ आठ

3. ✔ नौ

4. ✖ दस

Question Number : 102 Question Id : 630680301039 Is Question Mandatory : No Calculator :

None Response Time : N.A Think Time : N.A Minimum Instruction Time : 0

Correct Marks : 1 Wrong Marks : 0

‘उहाँहरू राम्रो काम गरे’ वाक्यको सही रूह हो-

Options :

1. ✖ उहाँहरू राम्रो काम गर्दै थिइन्।

2. ✖ ‘उहाँहरू राम्रो काम गर्दै थिई।

3. ✖ ‘उहाँहरू राम्रो काम गर्दै छिन्।

4. ✔ ‘उहाँहरू राम्रो काम गर्दै हुनुहुन्छ।

WWW.ITIEDUCATION.COM

Question Number : 103 Question Id : 630680301040 Is Question Mandatory : No Calculator :

None Response Time : N.A Think Time : N.A Minimum Instruction Time : 0

Correct Marks : 1 Wrong Marks : 0

‘तपाईंले हिजो कति पढ्यौ’?-को शुद्ध वाक्य कुन हो?

Options :

1. ✖ ‘तपाईंले हिजो कति पढिस्’?

2. ✔ ‘तपाईंले हिजो कति पढ्नुभयो’?

3. ✖ 'तपाईंले हिजो कति पढ्?'

4. ✖ 'तपाईंले हिजो कति पढ्छन्'?

Question Number : 104 Question Id : 630680301041 Is Question Mandatory : No Calculator :

None Response Time : N.A Think Time : N.A Minimum Instruction Time : 0

Correct Marks : 1 Wrong Marks : 0

समीर भनेको हावा हो भने अचला भनेको के हो?

Options :

1. ✖ असल

2. ✖ अबला

3. ✔ पृथ्वी

4. ✖ आगो

WWW.ITIEDUCATION.COM

Question Number : 105 Question Id : 630680301042 Is Question Mandatory : No Calculator :

None Response Time : N.A Think Time : N.A Minimum Instruction Time : 0

Correct Marks : 1 Wrong Marks : 0

अग्लोको उल्टा होचो हो भने बाक्लो-को के हो?

Options :

1. ✖ खरो

2. ✖ पालतो

3. ✓ पातलो

4. ✘ माथिका कुनै पनि होइनन्।

Question Number : 106 Question Id : 630680301043 Is Question Mandatory : No Calculator :

None Response Time : N.A Think Time : N.A Minimum Instruction Time : 0

Correct Marks : 1 Wrong Marks : 0

आगो खानु-को अर्थ के हो?

Options :

1. ✘ डराउनु

2. ✘ झगडा गर्नु

3. ✘ हिममत्त हार्नु

4. ✓ बहादुर हुनु

WWW.ITIEDUCATION.COM

Question Number : 107 Question Id : 630680301044 Is Question Mandatory : No Calculator :

None Response Time : N.A Think Time : N.A Minimum Instruction Time : 0

Correct Marks : 1 Wrong Marks : 0

काँध हाल्नु भनेको --

Options :

1. ✓ टेवा दिनु हो

2. ✘

लडाउनु हो

3. ✖ पछार्नु हो

4. ✖ माथिका कुनै पनि होइन।

Is Section Default? :

null

Question Id : 630680301045 Sub Question Shuffling Allowed : Yes Group Comprehension
Questions : No Question Pattern Type : NonMatrix Calculator : None Response Time : N.A
Think Time : N.A Minimum Instruction Time : 0
Question Numbers : (108 to 110)

WWW.ITIEDUCATION.COM

तलको अनुच्छेद पढेर उत्तर लेख्नुहोस्।

दफ्तर जान हरिहर तयार भयो। कोट लगाउँदा त्यसको अघिल्लिरको कालो दागमा उसको दृष्टि पन्यो जो अघिल्लो दिन दफ्तरमा साइक्लोस्टाइल गर्दा लागेथ्यो। पानी र ब्रसले दाग हटाउन कोसिस गर्नु, तर सकेन। पल्लो घरको ड्राइभर छिमेकीबाट पेट्रोल मागेर दल्दा मात्र दाग केही छुट्यो। कोटलाई हेर्दै चन्द्राले भनी- 'दफ्तरमा फाल्टो काम गरेको पैसा आज पाएमा एउटा कोट सिलाउनै पर्छ है। कति दिन यसैले गुजारा गर्ने!' कोट फाटेको छैन, सफा गरेर लिएर अझ चल्छ। आजको पैसाले त म तिमी लागि सारी नल्याई छाड्दिनँ। पैसाले नभ्याएर तिमीलाई एउटै सारी ल्याउन नसकेको कति भयो, थाहा छ? भन्दै ठामठुम तयार भएर चन्द्राले बोल्ने मौकै नदिई हरिहर दफ्तर हिँड्यो। चन्द्रा वाल्ल परी।

पैसाको बन्डामा बाबुहरूका बिच मनोमालिन्य उपज्यो। सबैभन्दा बेसी खटे तापनि ठुलो भाग पाऊँ भन्ने हरिहरको क्षुद्र विचार थिएन। पाकिस्तानबाट आएका बडाबाबू चाहिँ कामको चापाचापमा पनि पत्र-पत्रिका पढेर समय गुजारथ्यो, लाजै नमानी आफूलाई ठुलो भाग पारेथ्यो। चप्रासीहरूलाई चाहिँ बिलो पनि थिएन। यसर्थ चप्रासीहरूको खातिर हरिहरले आफ्नो भागसमेत थापेन। बडाबाबुले उल्टा-उल्टा कुरा अफिसरकहाँ पुराएर हरिहरलाई बेसरी झपाच्यो। अफिसरको कोठाबाट सरासर आएर रिसले थरथर काँप्दै हरिहरले बडाबाबूको घोक्रो अँठ्यायो। घोक्रो नछिनिएको बोका जस्तो बडाबाबू कराउँदा मात्र उसले छोडिदियो। त्यो दिनभरि घोरिरहयो। बडाबाबू नभएको बेला चप्रासीहरूले हरिहरसँग कृतज्ञता प्रकट गर्दै भने- हजुर, यिनीहरूले गर्नसम्म गरिसके। दफ्तरको काम सिध्याएर पनि हामी यिनीहरूको अरू सेवामा लाग्नुपर्छ। रात झपक्क पर्दा घर पुग्छौँ औ बिहान कोठामा आँठै बजे दाखिल हुनुपर्छ। हाम्रो लागि तपाईँ अघि सर्नुहुन्छ र मात्र, नत्र अझ.....यत्तिकैमा बडाबाबू आयो।

Sub questions

Question Number : 108 Question Id : 630680301046 Is Question Mandatory : No Calculator :

None Response Time : N.A Think Time : N.A Minimum Instruction Time : 0

Correct Marks : 1 Wrong Marks : 0

प्रश्न- कार्यालयमा के खाने नियम रहेछ?

Options :

1. ✖ कुटाइ खाने

2. ✖ चिया खाने

3. ✖ खाना खाने

4. ✔ माथिका कुनै पनि होइनन्।

Question Number : 109 Question Id : 630680301047 Is Question Mandatory : No Calculator :
None Response Time : N.A Think Time : N.A Minimum Instruction Time : 0

Correct Marks : 1 Wrong Marks : 0

प्रश्न- कार्यालयमा को चाहिँ काममा अल्छी रहेछ?

Options :

1. ✖ चप्रासीहरू

2. ✖ हरिहर

3. ✖ अफिसर

4. ✔ बडाबाबू

WWW.ITIEDUCATION.COM

Question Number : 110 Question Id : 630680301048 Is Question Mandatory : No Calculator :
None Response Time : N.A Think Time : N.A Minimum Instruction Time : 0

Correct Marks : 1 Wrong Marks : 0

प्रश्न- कार्यालयमा को चाहिँ थैत्तरो रहेछ?

Options :

1. ✖ -चप्रासीहरू

2. ✖ हरिहर

3. ✓ बडाबाबू

4. ✘ अफिसर

WWW.ITIEDUCATION.COM